



Measure each of the bars (in centimeters) and then generate a line plot based on the information.

Answers



1. \_\_\_\_\_



2. \_\_\_\_\_



3. \_\_\_\_\_



4. \_\_\_\_\_



5. \_\_\_\_\_



6. \_\_\_\_\_



7. \_\_\_\_\_



8. \_\_\_\_\_



9. \_\_\_\_\_




10. \_\_\_\_\_



11. \_\_\_\_\_



12. \_\_\_\_\_



13. \_\_\_\_\_



14. \_\_\_\_\_



15. \_\_\_\_\_

**Line Plot**



Measure each of the bars (in centimeters) and then generate a line plot based on the information.

Answers

1)  6

1. 6

2)  6

2. 6

3)  9

3. 9

4)  6

4. 6

5)  6

5. 6

6)  6

6. 6

7)  6

7. 6

8)  9

8. 9

9)  9

9. 9

10)  9

10. 9

11)  6

11. 6

12)  6

12. 6

13)  2

13. 2

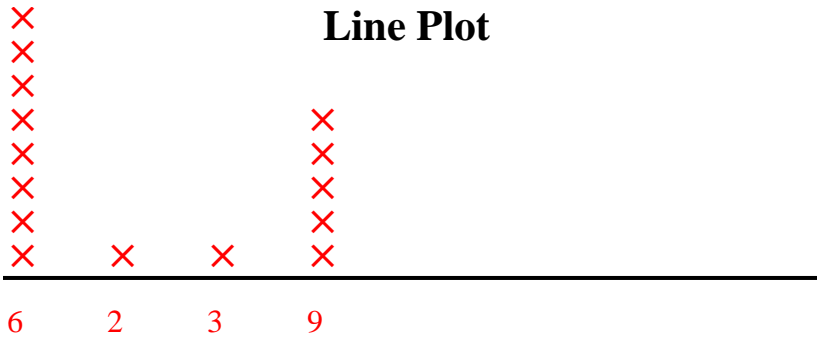
14)  9

14. 9

15)  3

15. 3
















**Line Plot**





Measure each of the bars (in centimeters) and then generate a line plot based on the information.

Answers
















- 1) 
- 2) 
- 3) 
- 4) 
- 5) 
- 6) 
- 7) 
- 8) 
- 9) 
- 10) 
- 11) 
- 12) 
- 13) 
- 14) 
- 15) 

- 1. \_\_\_\_\_
- 2. \_\_\_\_\_
- 3. \_\_\_\_\_
- 4. \_\_\_\_\_
- 5. \_\_\_\_\_
- 6. \_\_\_\_\_
- 7. \_\_\_\_\_
- 8. \_\_\_\_\_
- 9. \_\_\_\_\_
- 10. \_\_\_\_\_
- 11. \_\_\_\_\_
- 12. \_\_\_\_\_
- 13. \_\_\_\_\_
- 14. \_\_\_\_\_
- 15. \_\_\_\_\_

**Line Plot**

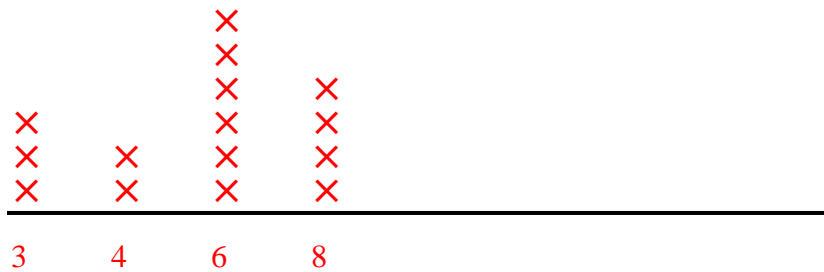


Measure each of the bars (in centimeters) and then generate a line plot based on the information.

- 1)  3
- 2)  4
- 3)  6
- 4)  6
- 5)  4
- 6)  3
- 7)  6
- 8)  8
- 9)  8
- 10)  6
- 11)  8
- 12)  3
- 13)  6
- 14)  6
- 15)  8

- Answers
- 1. 3
  - 2. 4
  - 3. 6
  - 4. 6
  - 5. 4
  - 6. 3
  - 7. 6
  - 8. 8
  - 9. 8
  - 10. 6
  - 11. 8
  - 12. 3
  - 13. 6
  - 14. 6
  - 15. 8

**Line Plot**





Measure each of the bars (in centimeters) and then generate a line plot based on the information.

Answers



1. \_\_\_\_\_



2. \_\_\_\_\_



3. \_\_\_\_\_



4. \_\_\_\_\_



5. \_\_\_\_\_



6. \_\_\_\_\_



7. \_\_\_\_\_



8. \_\_\_\_\_



9. \_\_\_\_\_



10. \_\_\_\_\_



11. \_\_\_\_\_



12. \_\_\_\_\_



13. \_\_\_\_\_

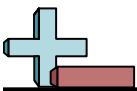


14. \_\_\_\_\_


















15. \_\_\_\_\_

**Line Plot**

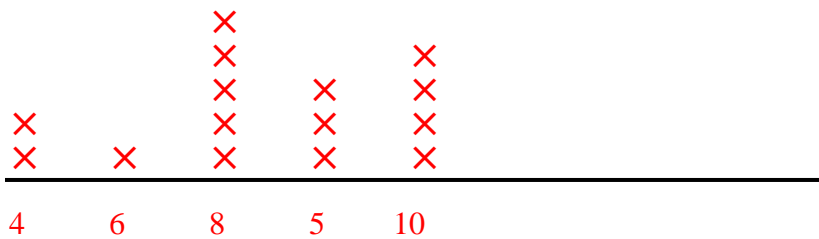


Measure each of the bars (in centimeters) and then generate a line plot based on the information.

- 1)  8
- 2)  8
- 3)  8
- 4)  10
- 5)  5
- 6)  4
- 7)  5
- 8)  6
- 9)  8
- 10)  8
- 11)  10
- 12)  10
- 13)  4
- 14)  5
- 15)  10

- Answers
- 1. 8
  - 2. 8
  - 3. 8
  - 4. 10
  - 5. 5
  - 6. 4
  - 7. 5
  - 8. 6
  - 9. 8
  - 10. 8
  - 11. 10
  - 12. 10
  - 13. 4
  - 14. 5
  - 15. 10

**Line Plot**





Measure each of the bars (in centimeters) and then generate a line plot based on the information.

Answers



1. \_\_\_\_\_



2. \_\_\_\_\_



3. \_\_\_\_\_



4. \_\_\_\_\_



5. \_\_\_\_\_



6. \_\_\_\_\_



7. \_\_\_\_\_



8. \_\_\_\_\_



9. \_\_\_\_\_



10. \_\_\_\_\_



11. \_\_\_\_\_



12. \_\_\_\_\_



13. \_\_\_\_\_

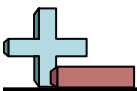


14. \_\_\_\_\_



15. \_\_\_\_\_

**Line Plot**



Measure each of the bars (in centimeters) and then generate a line plot based on the information.

Answers



1. 4



2. 2



3. 10



4. 2



5. 2



6. 4



7. 2



8. 7



9. 10



10. 7



11. 6



12. 10



13. 2

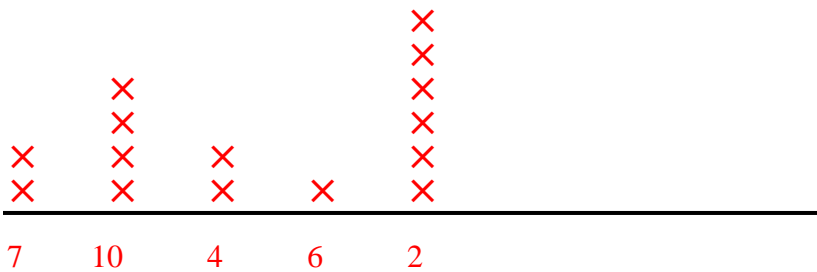


14. 10



15. 2

**Line Plot**







Measure each of the bars (in centimeters) and then generate a line plot based on the information.

Answers



1. \_\_\_\_\_



2. \_\_\_\_\_



3. \_\_\_\_\_



4. \_\_\_\_\_



5. \_\_\_\_\_



6. \_\_\_\_\_



7. \_\_\_\_\_



8. \_\_\_\_\_



9. \_\_\_\_\_



10. \_\_\_\_\_



11. \_\_\_\_\_



12. \_\_\_\_\_



13. \_\_\_\_\_



14. \_\_\_\_\_



15. \_\_\_\_\_

**Line Plot**



Measure each of the bars (in centimeters) and then generate a line plot based on the information.

Answers



1. 9



2. 3



3. 3



4. 3



5. 7



6. 9



7. 3



8. 9



9. 4



10. 9



11. 7



12. 7



13. 4

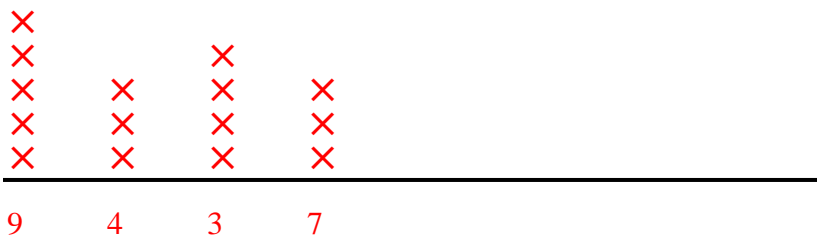


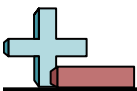
14. 9



15. 4

**Line Plot**





Measure each of the bars (in centimeters) and then generate a line plot based on the information.

Answers



1. \_\_\_\_\_



2. \_\_\_\_\_



3. \_\_\_\_\_



4. \_\_\_\_\_



5. \_\_\_\_\_



6. \_\_\_\_\_



7. \_\_\_\_\_



8. \_\_\_\_\_



9. \_\_\_\_\_



10. \_\_\_\_\_



11. \_\_\_\_\_



12. \_\_\_\_\_



13. \_\_\_\_\_



14. \_\_\_\_\_



15. \_\_\_\_\_

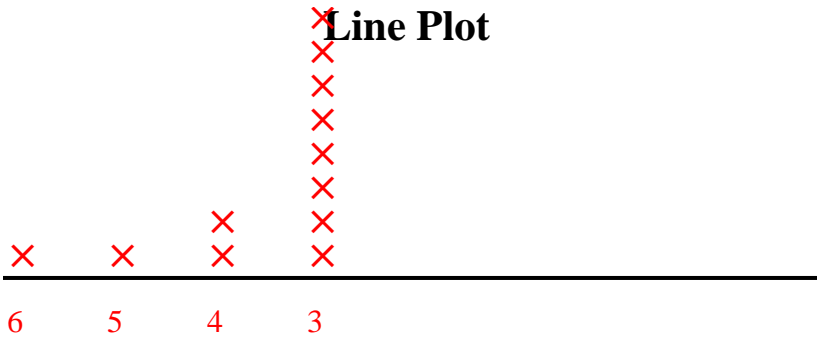
**Line Plot**



Measure each of the bars (in centimeters) and then generate a line plot based on the information.



**Line Plot**



Answers

1. 3

2. 3

3. 3

4. 3

5. 4

6. 3

7. 3

8. 5

9. 3

10. 3

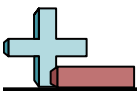
11. 6

12. 3

13. 3

14. 3

15. 4



Measure each of the bars (in centimeters) and then generate a line plot based on the information.

Answers



1. \_\_\_\_\_



2. \_\_\_\_\_



3. \_\_\_\_\_



4. \_\_\_\_\_



5. \_\_\_\_\_



6. \_\_\_\_\_



7. \_\_\_\_\_



8. \_\_\_\_\_



9. \_\_\_\_\_



10. \_\_\_\_\_



11. \_\_\_\_\_



12. \_\_\_\_\_



13. \_\_\_\_\_

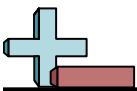


14. \_\_\_\_\_


















15. \_\_\_\_\_

**Line Plot**

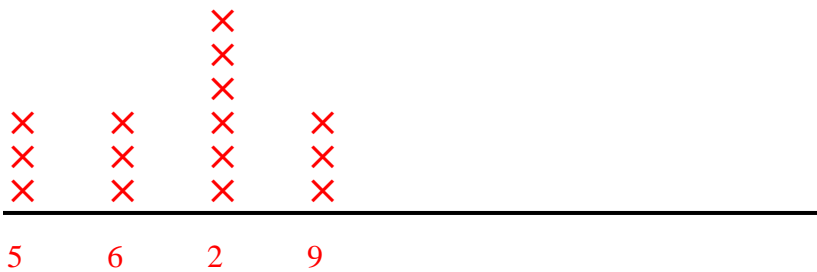


Measure each of the bars (in centimeters) and then generate a line plot based on the information.

- 1)  9
- 2)  2
- 3)  9
- 4)  6
- 5)  5
- 6)  2
- 7)  2
- 8)  5
- 9)  2
- 10)  9
- 11)  5
- 12)  6
- 13)  2
- 14)  6
- 15)  2

- Answers
- 1. 9
  - 2. 2
  - 3. 9
  - 4. 6
  - 5. 5
  - 6. 2
  - 7. 2
  - 8. 5
  - 9. 2
  - 10. 9
  - 11. 5
  - 12. 6
  - 13. 2
  - 14. 6
  - 15. 2

**Line Plot**





Measure each of the bars (in centimeters) and then generate a line plot based on the information.

Answers



1. \_\_\_\_\_



2. \_\_\_\_\_



3. \_\_\_\_\_




4. \_\_\_\_\_



5. \_\_\_\_\_



6. \_\_\_\_\_



7. \_\_\_\_\_



8. \_\_\_\_\_



9. \_\_\_\_\_



10. \_\_\_\_\_



11. \_\_\_\_\_



12. \_\_\_\_\_



13. \_\_\_\_\_



14. \_\_\_\_\_



15. \_\_\_\_\_

**Line Plot**



Measure each of the bars (in centimeters) and then generate a line plot based on the information.

Answers

1)  3


1. 3

2)  7

2. 7

3)  7


3. 7

4)  4

4. 4

5)  7


5. 7

6)  7

6. 7

7)  3

7. 3

8)  10

8. 10

9)  7

9. 7

10)  7


10. 7

11)  7

11. 7

12)  10

12. 10

13)  9

13. 9

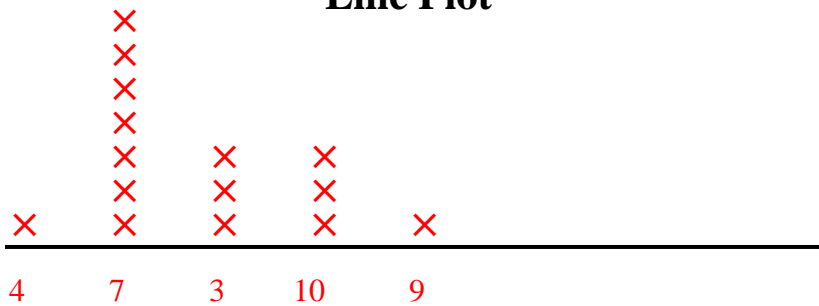
14)  3

14. 3

15)  10

15. 10

**Line Plot**

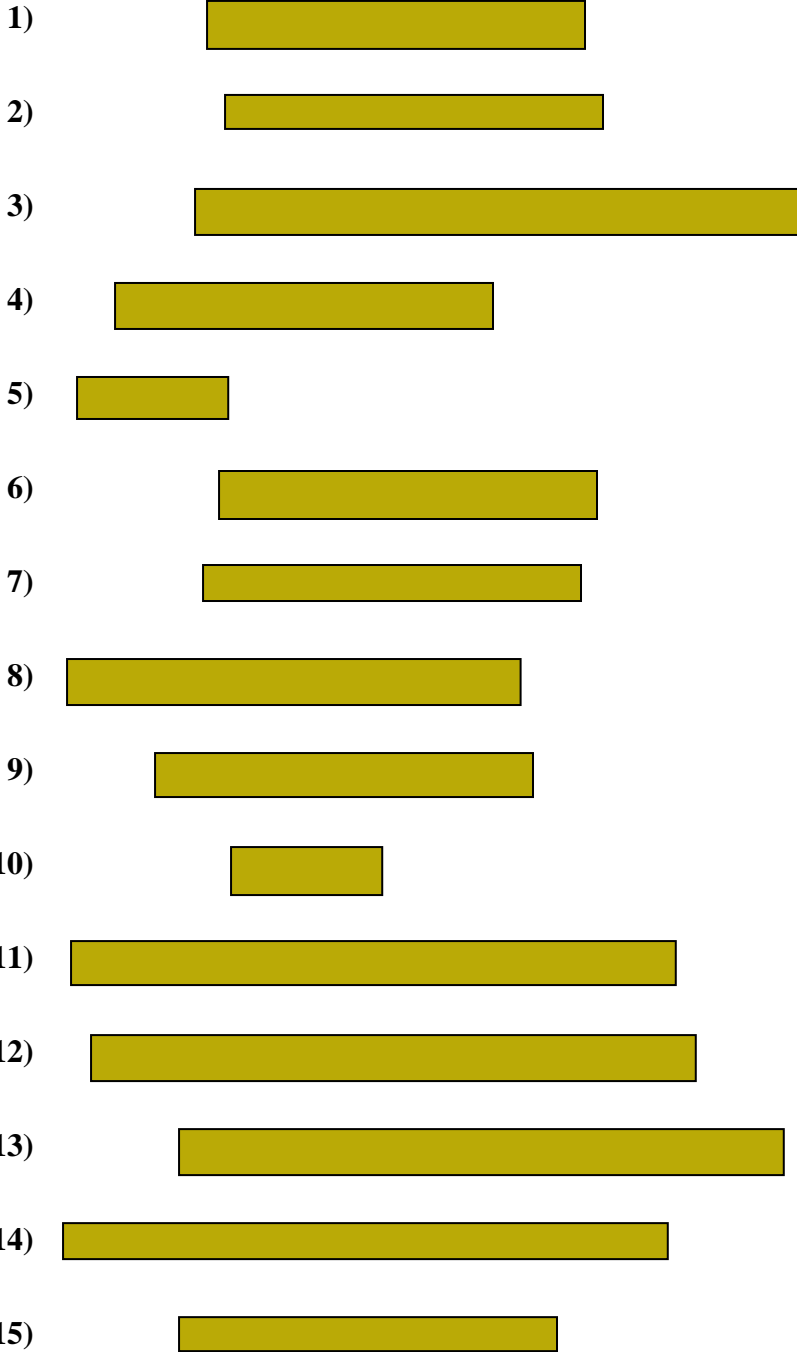






Measure each of the bars (in centimeters) and then generate a line plot based on the information.

Answers



- 1. \_\_\_\_\_
- 2. \_\_\_\_\_
- 3. \_\_\_\_\_
- 4. \_\_\_\_\_
- 5. \_\_\_\_\_
- 6. \_\_\_\_\_
- 7. \_\_\_\_\_
- 8. \_\_\_\_\_
- 9. \_\_\_\_\_
- 10. \_\_\_\_\_
- 11. \_\_\_\_\_
- 12. \_\_\_\_\_
- 13. \_\_\_\_\_
- 14. \_\_\_\_\_
- 15. \_\_\_\_\_

**Line Plot**



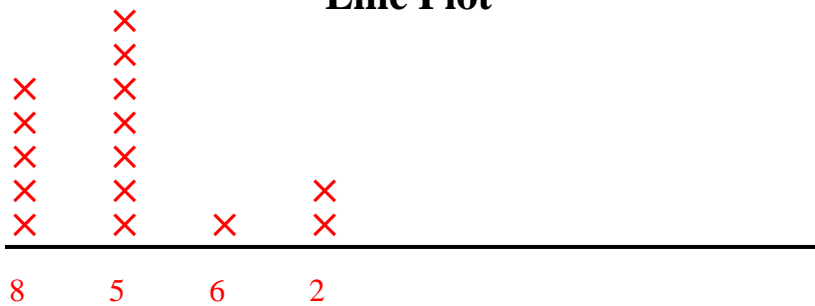
Measure each of the bars (in centimeters) and then generate a line plot based on the information.

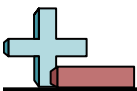
Answers

- 1) 5
- 2) 5
- 3) 8
- 4) 5
- 5) 2
- 6) 5
- 7) 5
- 8) 6
- 9) 5
- 10) 2
- 11) 8
- 12) 8
- 13) 8
- 14) 8
- 15) 5

- 1. 5
- 2. 5
- 3. 8
- 4. 5
- 5. 2
- 6. 5
- 7. 5
- 8. 6
- 9. 5
- 10. 2
- 11. 8
- 12. 8
- 13. 8
- 14. 8
- 15. 5

**Line Plot**





Measure each of the bars (in centimeters) and then generate a line plot based on the information.

Answers



1. \_\_\_\_\_




2. \_\_\_\_\_



3. \_\_\_\_\_



4. \_\_\_\_\_



5. \_\_\_\_\_



6. \_\_\_\_\_



7. \_\_\_\_\_



8. \_\_\_\_\_



9. \_\_\_\_\_



10. \_\_\_\_\_



11. \_\_\_\_\_



12. \_\_\_\_\_



13. \_\_\_\_\_



14. \_\_\_\_\_















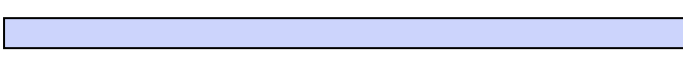


15. \_\_\_\_\_

**Line Plot**



Measure each of the bars (in centimeters) and then generate a line plot based on the information.

- 1)  9
- 2)  8
- 3)  9
- 4)  2
- 5)  2
- 6)  5
- 7)  8
- 8)  8
- 9)  8
- 10)  10
- 11)  10
- 12)  8
- 13)  9
- 14)  8
- 15)  9

- Answers
- 1. 9
  - 2. 8
  - 3. 9
  - 4. 2
  - 5. 2
  - 6. 5
  - 7. 8
  - 8. 8
  - 9. 8
  - 10. 10
  - 11. 10
  - 12. 8
  - 13. 9
  - 14. 8
  - 15. 9

**Line Plot**

